

THE GREAT MUNJIE CHALLENGE

Try yourself out on as many of these individual challenges as you can.

You may work in groups for some, if you prefer.



Most of the activities you can work on at any time, others will need to be performed with a teacher supervising. (Not all activities are available on all camps, eg archery.)



There are sheets and books available from staff to help you with some of the tasks.

There are eight types of challenges.



Physical	Navigational
Creative	Estimation
Problem Solving	Camp Craft
Environmental	Observation



To gain the

THE MUNJIE CHALLENGE CERTIFICATE

You must complete at least 10 points worth of activities, in each of the **eight** challenge groups.

(A total of 80 points or more)



GOOD LUCK !



PHYSICAL CHALLENGES.



1. ROPES COURSE.

COMPLETE ONE SECTION OF THE ROPES COURSE WITHOUT TOUCHING THE GROUND.

(3 POINTS) _____

COMPLETE TWO SECTIONS OF THE ROPES COURSE IN A ROW WITHOUT TOUCHING THE GROUND.

(6 POINTS) _____

GET ALL THE WAY AROUND THE ROPES COURSE WITHOUT TOUCHING THE GROUND.

(10 POINTS) _____

2. STILTS.

WITHOUT TOUCHING THE GROUND :-

MOVE FROM THE "ALL ABOARD" STUMP TO THE FLAGPOLE.

(6 POINTS) _____

MOVE FROM THE FLAGPOLE TO THE "THE SPIDER WEB".

(6 POINTS) _____

MOVE FROM "THE SPIDER WEB" TO THE "ALL ABOARD" STUMP.

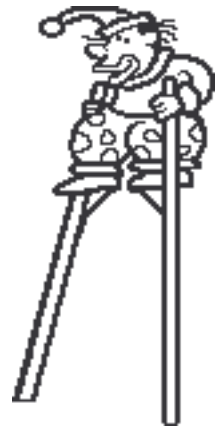
(6 POINTS) _____

MOVE FIVE STEPS.

(4 POINTS) _____

BALANCE ON THE ONE SPOT FOR FIVE SECONDS.

(2 POINT) _____



3. BALANCE. (BE SURE TO HAVE A "SPOTTER")

WALK ALONG ONE OF THE TELEPHONE POLES.

(2 POINTS) _____

WALK ALONG ONE OF THE TELEPHONE POLES WITH YOUR EYES SHUT.

(5 POINTS) _____

STAND ON ONE LEG WITH YOUR EYES SHUT FOR TEN SECONDS.

(5 POINTS) _____



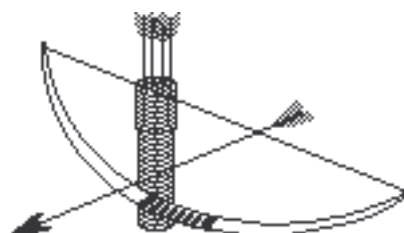
4. ARCHERY.

WITH A BOW & ARROW, HIT THE FERAL CAT FROM A DISTANCE OF 10 METRES.

(10 POINTS) _____

USING A STANDARD CIRCLE TARGET AND THREE CONSECUTIVE ARROWS, RECORD YOUR BEST SCORE.

(GOLD = 9 RED=7 BLUE=5 BLACK =3 WHITE =1) _____



NAVIGATION CHALLENGES.

1. DISTANCE AND DIRECTION.

STANDING WITH YOUR BACK TO TREE A, WHAT IS LOCATED AT :-

44 METRES, ON A BEARING OF 146°

75 METRES, ON A BEARING OF 298°

62 METRES, ON A BEARING OF 27°

(2 POINTS EACH) _____



2. SIGHTING.

STANDING ON THE "ALL ABOARD" STUMP, WHAT ARE THE COMPASS BEARINGS TO THE :-
FLAG POLE _____

RAIN GAUGE _____

BURMESE BRIDGE _____

(2 POINTS EACH) _____

3. MAP WORK.

USING THE MAP **HEYFIELD 8222-2-3 (1:25,000)**

WHAT IS LOCATED AT GRID REF 821037 ? _____ (2 POINTS) _____

WHAT IS LOCATED AT GRID REF 817017 ? _____ (2 POINTS) _____

WHAT IS LOCATED AT GRID REF 841020 ? _____ (2 POINTS) _____

WHAT IS LOCATED AT GRID REF 823046 ? _____ (2 POINTS) _____

IF YOU WERE A BIRD, WHAT DISTANCE WOULD YOU FLY FROM:-

Grid Reference - 859982 TO Grid Reference 819019 ? _____ KM. (4 POINTS) _____

Grid Reference - 841020 TO Grid Reference 819019 ? _____ KM. (4 POINTS) _____

Grid Reference - 811960 TO Grid Reference 819019 ? _____ KM. (4 POINTS) _____

NAME THE FIVE COVES LOCATED IN LAKE GLENMAGGIE. (1 POINT EACH) _____

WHAT IS THE DIRECTION FROM SANDY POINT TO:-

BLORE'S HILL _____

HEYFIELD _____

COONGULLA _____

GLENMAGGIE POINT _____

UPPER MAFFRA WEST _____

(1 POINT EACH) _____

CREATIVE CHALLENGES.

1. CREATE A MOBILE USING ONLY NATURAL MATERIALS. (cotton thread allowed)
(10 POINTS) _____
2. WRITE A POEM OR SHORT STORY ABOUT THIS CAMP.
(10 POINTS) _____
3. LOCATE SOME NATURALLY OCCURRING CLAY AND MODEL IT INTO SOMETHING USEFUL.
(10 POINTS) _____
4. USING A PIECE OF CHARCOAL, DRAW A SKETCH OF A FUNNY INCIDENT AT CAMP.
(10 POINTS) _____
5. MAKE SOMETHING USING ORIGAMI.
(10 POINTS) _____



ESTIMATION CHALLENGES.

1. WITHOUT REMOVING THE LID, GUESS THE NUMBER OF GUMNUTS IN THE JAR.

2. ESTIMATE THE HEIGHT OF THE FLAG POLE ABOVE THE GARDEN BED.

3. ESTIMATE THE DISTANCE FROM THE **BOAT SHED** TO THE **S.E.C...POLE NO. 12** .

EASY POINTS - DO ALL THREE TO GET 10 POINTS. **NO PENALTY** FOR GETTING THEM WRONG!

PROBLEM SOLVING CHALLENGES.

1. ROCKET.

USING ONLY:- FISHING LINE STICKY TAPE STRAWS A BALLOON
 MAKE A BALLOON-POWERED ROCKET WHICH WILL TRAVEL AT LEAST 10 METRES IN A
 STRAIGHT LINE. (10 POINTS) _____



2. SCRAMBLED WORDS.

UNSCRAMBLE THE FOLLOWING NAMES OF LOCAL GEOGRAPHY. (TWO POINTS EACH)

DHYFILEE _____
 OACILL _____
 ASENT _____
 MEGGILNEAG _____
 ANJAMRU _____
 REMAATSCIL VIRER _____



3. WORDLES. (1 POINT EACH) _____

Wordles are word puzzles that hide a common saying. For example **SIDE SIDE** would be side by side

DEAL	<u> </u> <u> </u> READ <u> </u> <u> </u>	APPLE	<u> </u> STAY NIGHT	GLHANDOVE
_____IT	MCE MCE MCE	WHEATHER	TIMING TIM ING	NAFISH NAFISH
KNEE LIGHTS	ALL WORLD	ECNALG	BJAOCKX	GEGS
2UM +2UM	ISSUE ISSUE ISSUE ISSUE ISSUE ISSUE ISSUE ISSUE ISSUE ISSUE	ED + ED	<u>ONCE</u> TIME	CHAIR
HIJKLMNO	T I M E ABDE	<u>ESTIMATED</u> I u	ME NT	NOON LAZY

CAMP CRAFT CHALLENGES.

1. USING THE "TYING KNOTS" DISPLAY AS A GUIDE, SHOW YOUR TEACHER HOW TO TIE A:-
 - REEF KNOT.
 - BOWLINE.
 - CLOVE HITCH.
 - FIGURE OF 8 KNOT.
 - ANY OTHER KNOT IN THE DISPLAY.(3 POINTS EACH) _____

2. **STRICTLY UNDER TEACHER SUPERVISION**, BUILD AND LIGHT A CAMP FIRE USING ONLY ONE MATCH AND NO PAPER. (10 POINTS) _____



3. **STRICTLY UNDER TEACHER SUPERVISION**, COOK SOMETHING ON AN OPEN FIRE. (10 POINTS) _____

ENVIRONMENTAL CHALLENGES.

1. IDENTIFY THREE DIFFERENT BIRDS THAT YOU'VE SPOTTED AT CAMP. (3 POINT EACH) _____

2. DESCRIBE THE BARK OF THREE DIFFERENT EUCALYPT TREES. (10 POINTS) _____



3. WITHOUT DAMAGING ANY TREES OR SHRUBS, FIND LEAVES FROM 5 DIFFERENT PLANTS. (2 POINTS EACH) _____



4. IDENTIFY THREE DIFFERENT INSECTS THAT YOU'VE SPOTTED AT CAMP.

(3 POINTS EACH) _____



OBSERVATION CHALLENGES.

1. ANSWER ALL OF THE FOLLOWING QUESTIONS. (2 POINTS EACH) _____


What was the date on which the mudbrick cabins were opened ? _____

Who officially opened them ? _____

How many fire hose reels are there at camp ? _____

How many buildings are there at camp ? _____

How many panes of glass are there in the main building windows? _____



2. WATCH A BIRD FOR FIVE MINUTES AND DESCRIBE ALL THE THINGS IT DOES.

(10 POINTS) _____



3. WATCH AN INSECT FOR FIVE MINUTES. DESCRIBE ALL THE THINGS IT DOES. (10 POINTS)

(10 POINTS) _____



RECORD SHEET.

You will need to get a staff member to sign that you have completed each activity.

Make sure that you have TEN points per group.

GROUP	TASK	POINTS	SIGNATURE
PHYSICAL	Ropes course		
	Stilts		
	Balance		
	Archery		
NAVIGATIONAL	Distance/direction		
	Sighting		
	Map		
CREATIVE	Mobile		
	Clay model		
	Sketch		
	Origami		
	Recital		
ESTIMATION	Gum nuts		
	Flag pole		
	Boat shed - Pole		
PROBLEM SOLVING	Balloon rocket.		
	Scrambled words		
	Words		
CAMP CRAFT	Knots		
	Fire lighting		
	Bush cooking		
ENVIRONMENTAL	Birds		
	Trees		
	Leaves		
	Insects		
OBSERVATION	Camp questions		
	Bird observation		
	Insect observation		
	TOTAL		